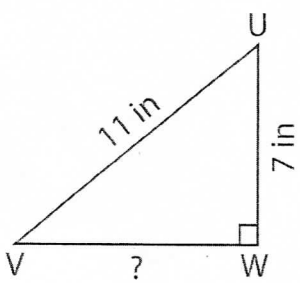


Pythagorean Theorem

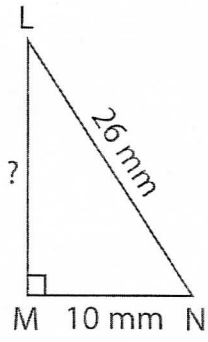
Determine the missing length in each right triangle using the Pythagorean theorem. Round the answer to the nearest tenth.

1)



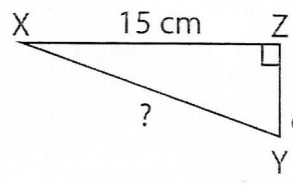
VW = _____

2)



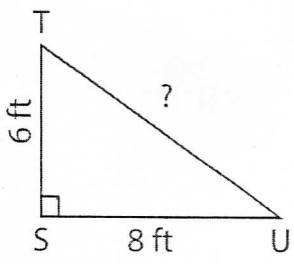
LM = _____

3)



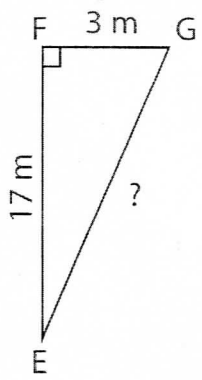
XY = _____

4)



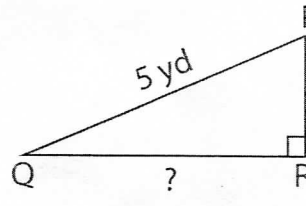
TU = _____

5)



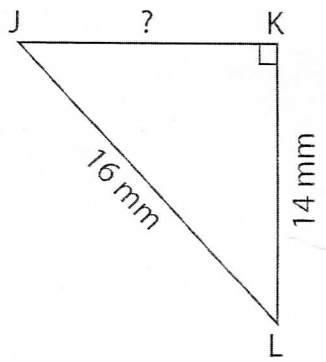
EG = _____

6)



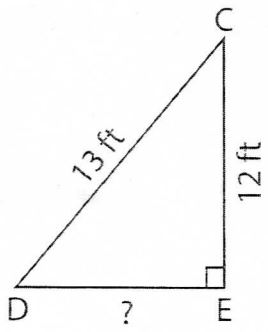
QR = _____

7)



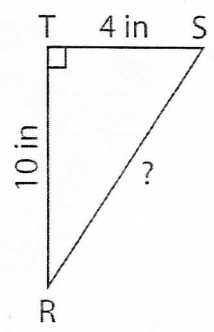
JK = _____

8)



DE = _____

9)



RS = _____