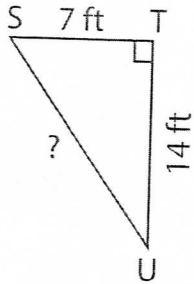


Pythagorean Theorem

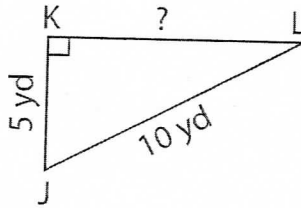
Determine the missing length in each right triangle using the Pythagorean theorem. Round the answer to the nearest tenth.

1)



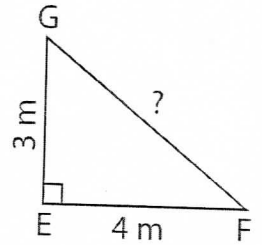
SU = _____

2)



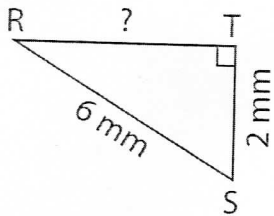
KL = _____

3)



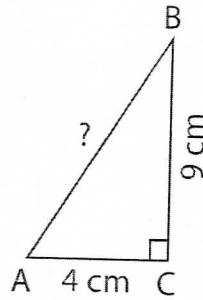
FG = _____

4)



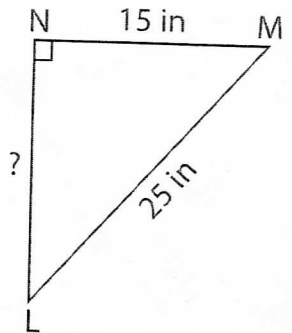
RT = _____

5)



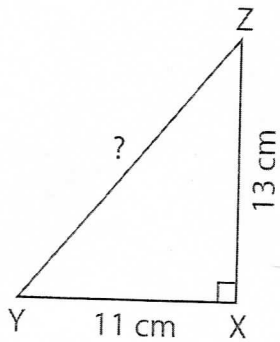
AB = _____

6)



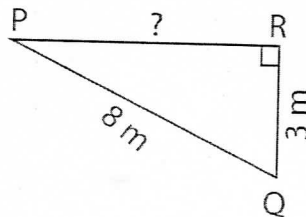
NL = _____

7)



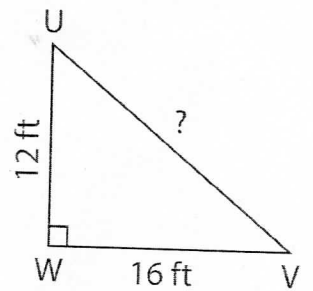
YZ = _____

8)



PR = _____

9)



UV = _____